

ADARSH VIDYALAYA MOWA
HOLIDAY PRACTICE WORK / SKILL DEVELOPMENT ACTIVITIES (2023-24)
CLASS – III

General Note:

- 1. All the assigned work will be assessed and graded.**
- 2. All vacation Practice work need to be done in class work copy.**
- 3. Assessment of reading will be done in every exam.**
- 4. Students should learn Hindi pledge.**
- 5. Parents are requested to:**
 - Spend time & have meals together with your ward.**
 - Motivate your ward to inculcate the habit of “READING HINDI & ENGLISH Literature (Newspaper, Comics etc.)**
 - Allow them to be independent (age wise) in their daily tasks like:**
 - Arrange shelves**
 - Washing their own plates**
 - Watering plants & weeding Garden**
 - Hang/fold clean clothes**
 - Dust furniture**
 - Do simple mending (hems, buttons, etc.)**
 - Shop for groceries with list**
 - Include your ward while preparing monthly budget.**
 - Share your family history & your childhood memories with them**

SUBJECT – ENGLISH

1. Go for walks with the family. You will realize you have two of God's greatest gift Nature and your family. Write few sentences about it, Do not forget to thank God for these gifts .Click some pictures of your most enjoyable moments with your family and make a collage and paste it in your notebook.
2. Prepare an attractive and beautiful chart on Topic- Noun and its Kinds (for Roll No. 1- 10) Adjective and it's kinds (for Roll No. 11-20) Adverb and its kinds (for Roll No. 21- 30). Paste pictures related to topics where ever necessary.
3. Revise all the work done till date.

SUBJECT – HINDI

- 1) **मौखिक-** पाठ-1 कौन सिखाता है ? (कविता पाठ पढना, शब्दार्थ, प्रश्न-उत्तर याद करना)
पाठ-2 अनोखा जादू का खेल (पाठ पढना, शब्दार्थ याद करना)
व्याकरण- पाठ-1 पाठ पढना एवं प्रश्न उत्तर याद करना ।
- 2) बाल पत्रिका पढना
- 3) **लिखित-** क) व्याकरण (र) के विभिन्न रूप लिखिए (व्याकरण पेज नं 17)
ख) अनुस्वार, अनुनासिक, तथा विसर्ग की मात्रा वाले पाँच शब्द लिखिए ।
- 4) **क्रियाकलाप-** क) बच्चों को बारिश में नहाना बहुत अच्छा लगता है, कल्पना कीजिये कि आप भी बारिश में कई बार नहा चुके हैं । बारिश का चित्र बनाकर अपने उस आनंद के बारे में लिखिए ।
ख) पक्षी अपना घोंसला स्वयं बनाते है, आप भी आइसक्रीम स्टिक की सहायता से एक छोटी सी झोपड़ी का निर्माण कीजिये ।

SUBJECT – MATHEMATICS

1. Learn and write multiplication tables from 2 to 10(two times).
2. Make a list of age of your family members and categorize it into even numbers and odd numbers.
3. Draw the clock according to the given time using craft paper:
(i) Half past 2 (ii) 6 o' clock
4. Using craft papers of different colours, paste the following shapes in your copy:
(a) Cuboid (b) Cylinder (c) Cube (d) Sphere
and write there -
(i) Number of faces (ii) Number of edges(iii) Number of vertices (corners)
5. Arrange in columns and add the following:
(i) $86 + 78 = ?$ (ii) $99 + 25 = ?$
6. Arrange in columns and subtract the following:
(i) $92 - 58 = ?$ (ii) $100 - 99 = ?$

SUBJECT – SCIENCE

1. Prepare a model of the following topics : (Any one)
 - a. Model of life cycle of frog
 - b. Respiratory system
 - c. Road sign and write their meaning
 - d. Make a model of molecular structure of solid liquid and gas
2. Go for a nature walk around your school or home with an adult make a list of all the things you see around you under the following segments:
 - a. Living things
 - b. Non living things
3. Draw well labeled diagram of the following :
 - a. Parts of flowering plants
 - b. Types of root
 - c. Human digestive system
 - d. Food chain
 - e. First aid box
4. Paste pictures of the following animals in your scrapbook :
 - a. Two gnawing animals
 - b. Two gulping animals
 - c. Two carnivores
 - d. Two herbivores
5. Unscramble the letters:
 - a. I grow below the ground-(TORO) _____
 - b. Plant grow from me -(ESDE)_____
 - c. I gave the main structure of a plants -TESM_____
 - d. Cockroaches breathe through this breathing organ-(CIPSALRSE)_____
 - e. I am a pet bird -(RAPORT)_____
 - f. I use my tail in my movement -(KMYONE)_____
 - g. Birds use their _____ to fly. (INGWS)

SUBJECT – SOCIAL STUDIES (SST)

1. Draw a well labelled diagram of the solar system .
2. Make model of given topics as per your class and section mentioned.
III A - Road Safety
III B- Directions
III C - Phases of Moon
IIID - Transport

SUBJECT – INFORMATION TECHNOLOGY (IT)

1. Collect (Draw or Paste) the image of any five Input Devices and Output Devices, Write their names also.
2. In Smart boards of School which output device is used?
3. Write the full form of
 - a) CPU
 - b) VDU
4. Enlist any three examples of System Software and Application Software.
5. Put these words in the Correct Columns
Music, Dirty, Clothes , Music, Clean Clothes


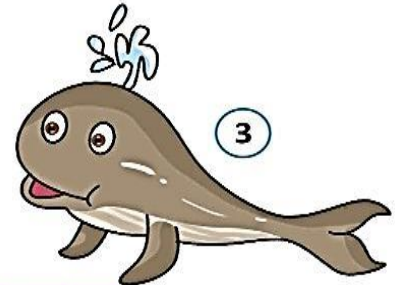
Input	Processing Devices	Output
CD		
	Washing machine	

SUBJECT – GENERAL KNOWLEDGE (GK)


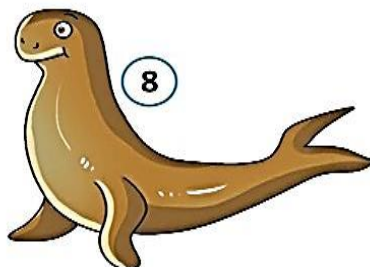


- 1) When is National Technology Day celebrated in India?
- 2) After how many days of Dussehra, Diwali is celebrated?
- 3) How many moons does Jupiter have?
- 4) What is 8 o'clock in the evening called?
- 5) Which is the hardest part of the human body?
- 6) In which country did chess originate?
- 7) Which part of the plant is responsible for making seeds?
- 8) Which day is celebrated on 23rd April?
- 9) In which year All India Music Academy was established?
- 10) Who is known as human computer?
- 11) In which sport a long board is used to ride the waves of the sea.
- 12) What has to be broken before you can use it?
- 13) Name the largest ship ever built in India Maritime history.
- 14) Name the place where International Yoga festival was held.
- 15) Which tools is considered as the origin of calculator?
- 16) Where was India's largest floating solar power project Commissioned?
- 17) Name the world's largest rainforest.
- 18) Write the another name of jute?
- 19) In which state ' Tamasha ' is the famous folk form of musical theatre?
- 20) Who is India's second citizen?
- 21) What is the verb in the following sentence? I set the glass on the table.
- 22) In which city, India's first 3D printed post office was opened?
- 23) Which planet takes less than 10 hours to complete its one rotation?
- 24) How many times can you fold a paper by hand?
- 25) Where were three faith of Hinduism, Buddhism and Jainism carved?
- 26) In which sports the test accuracy and speed is using various types of gun?
- 27) Who use its tail to balance it self. If you lift its tail, It would not be able to jump?

- 28) In which state is the Mandu festival celebrated?
- 29) Which organisation has designed the oxygen recycling system (ORS)?
- 30) Is zero an even number or an odd number?
- 31) Which two parts of the body continue to grow for your entire life?
- 32) Name the legendary horse, who has a horn on its forehead?
- 33) What does the heart pumps?
- 34) Which state celebrates the 'Bhed Mata Mela' fair annually?
- 35) Water is to drink as air is to _____.
- 36) Which bird uses its wings and Clippers to swim?
- 37) Which plant gel from the leaves helps to treat scrapes, cut, bites and sunburn?
- 38) Which insect can survive 6 weeks without a meal and one week without its head?
- 39)

With the help of picture clues, find and circle the names of the water animals in the given word search. One has been done for you.



A	Q	D	O	L	P	H	I	N	T	Z	J
S	Z	W	E	R	Y	X	W	H	A	L	E
H	M	F	O	I	O	L	K	G	D	P	L
A	B	X	C	R	A	B	Y	H	T	N	L
R	E	S	T	A	R	F	I	S	H	C	Y
K	R	Y	O	P	H	N	C	B	H	Z	F
P	T	W	P	B	N	C	Q	U	P	X	I
Y	Y	Q	U	C	I	F	X	G	I	Q	S
P	U	O	S	E	A	L	R	E	Q	U	H
T	P	Y	Q	A	G	J	N	M	V	G	Z
O	S	E	A	H	O	R	S	E	L	F	T



40)

Match the words with the correct picture



threw

jumped/skipped

sailed

learnt

kicked

hopped

flew

fished

caught

bounced