



**ADARSH VIDYALAYA, MOWA
HOLIDAY HOMEWORK (2025-2026)
CLASS-VI**

Let the warmth of summer awaken the fire within you—create, explore, dream, and grow. This holiday, let your talents bloom like never before.

Summer is not just a break from the classroom; it's a beautiful season of self-discovery. Whether it's painting a canvas, penning down thoughts, solving puzzles, or learning a new skill—every little effort adds to the masterpiece that is you.

So take this time to nurture your passions, challenge yourself, and come back stronger, brighter, and more confident. Remember, the journey of growth doesn't pause—it transforms.





General Note:

1. All the assigned work will be assessed and graded.
2. All vacation Practice work need to be done in class work copy.
3. Assessment of reading will be done in every exam.
4. Students should learn Hindi and Sanskrit pledge.
5. Parents are requested to:
 - Spend time & have meals together with your ward.
 - Motivate your ward to inculcate the habit of "READING HINDI & ENGLISH Literature (Newspaper, Comics etc.)"
 - Allow them to be independent (age wise) in their daily tasks like:
 - Arrange shelves
 - Washing their own plates
 - Watering plants & weeding Garden
 - Hang/fold clean clothes
 - Dust furniture
 - Do simple mending (hems, buttons, etc.)
 - Shop for groceries with list
 - Iron clothes etc.
 - Include your ward while preparing monthly budget.
 - Share your family history & your childhood memories with them





ENGLISH

1. Read the novel Gulliver's Travels and write a gist of it.
2. Imagine you wake up with a superpower. What would you do? Describe it with picture presentation.
3. Prepare a greeting card for your parent's birthday, expressing your gratitude for their love and affection and appreciating their admirable qualities. Use your creativity and original thoughts.
4. Watch an inspiring movie and write a short review of it.

HINDI

वाचन कार्य -

पाठ- 1 मातृभूमि एवं पाठ -2 गोल

(पाठों को पढ़ना, समझना, अर्थ ग्रहण करना, शब्दार्थ एवं प्रश्नोत्तर याद करना)

(समाचार पत्र पढ़ना चित्र कथा पढ़ना, बाल पत्रिकाएँ पढ़ना)

संक्षिप्त रामायण-

- 1) रामायण की रचना ,आदि कांड
 - 2) अयोध्या कांड
 - 3) अरण्य काण्ड
- (उपरोक्त पाठों का अध्ययन करना)

लिखित-

1 अनेकार्थक शब्द किसे कहते है ? निम्नलिखित शब्दों के अनेकार्थक शब्द लिखिए -

क. अक्षर ख. अंबर ग. अंक घ. अर्थ ङ उत्तर च. काल छ. कर ज. कल
झ. घाट ञ. जड़

2. पर्यायवाची शब्द की परिभाषा लिखकर निम्नलिखित शब्दों के तीन-तीन पर्यायवाची शब्द लिखिए।

क. अग्नि ख.अंधकार ग.आँख घ.ईश्वर ङ. कमल च. कपड़ा छ. असुर ज. अतिथि
झ. आकाश ञ. उपवन

3. दिए गए शब्दों के विलोम लिखिए-

क. अंधकार ख. अनुराग ग. अपेक्षा घ. आदि

4. संधि की परिभाषा, उनके भेद एवं स्वर संधि के प्रकारों को उदाहरण सहित लिखिए।





5. पत्र लिखिए-

क. अपने मित्र को जन्मदिन पर आमंत्रित करते हुए पत्र लिखिए।

ख. अपने क्षेत्र में पेयजल की समस्या की ओर ध्यान आकृष्ट करते हुए स्वास्थ्य अधिकारी को पत्र लिखिए।

क्रियाकलाप-

- 1) अपने घर या पुस्तकालय से पिछले सप्ताह के समाचार पत्रों को देखिये और अपनी पसंद का एक खेल समाचार अपनी लेखन पुस्तिका में लिखिए।
- 2) भारत के पाँच राष्ट्रीय चिन्हों के चित्र चिपकाकर उनके बारे में 3-3 वाक्य लिखिए।

SANSKRIT

वाचनकार्यम्-

1. श्लोकद्वयम् अर्थैः साकम् स्मर्यतु।
2. प्रथमः पाठः (वयं वर्णमाला पठामः) अभ्याससहितं स्मर्यतु।

लेखनकार्यम्

1. शब्दरूपाणि लिखत- (बालक, लता, मित्र)
 2. धातुरूपाणि लिखत- (पठ् , खाद्, हस्) (लट्, लृट्,)
 3. अव्ययानि (1-19) अर्थ सहितं लिखत।
 4. पर्यायाः (1-14) लिखत।
 5. विपर्यायाः (1-12) लिखत।
 6. संख्या (1-20) संस्कृतेन लिखत।
 7. संस्कृत भाषया अनुवादं कुरुत-
- क) शिक्षक लिखता है।
- ख) यह कंप्यूटर है।

क्रियाकलापम्-





MATHEMATICS

Q1. Using the digits 7, 4, 8, 2 form :

- a) The greatest 4 – digit number
- b) The smallest 5 – digit number (By using any one digit twice)
- c) The greatest 6 – digit number (By using any one digit thrice)

Q2. Study each of the following patterns. Write the next two steps for each :

a) $99 \times 1 + 1 = 100$

$99 \times 2 + 2 = 200$

$99 \times 3 + 3 = 300$

b) $37 \times 3 = 111$

$37 \times 6 = 222$

$37 \times 9 = 333$

Q3. There are some cards and operation cards given in the table; you may take any operation card for a given Set of number cards such that you can reach the target number. The first one has been solved for you.

Number	Operation	Target	
2 3 6	+	20	2 + 3 × 6 = 20
9 5 7	-	38	
10 4 2	×	2	
	÷		

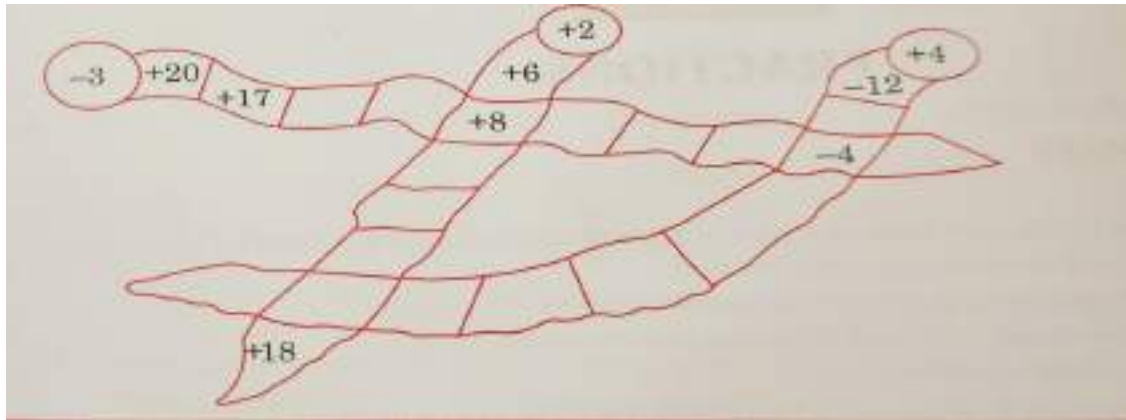
Q4. Measure the capacity of your water bottle in ml and litre. Calculate how many glasses of water it can fill.





Q5. Conduct a survey of your family members' favourite foods. Create a bar graph to represent a data.


Q6. Complete the trail.



Q7. Complete the table.

X	6	7	8	9	12	13	14	15
3								
4								
5								
6								
8								

Q8. The following fraction cards represent just three different numbers. Can you separate them and put into right bag.




Hint : Separate them into three groups of equivalent fractions, by changing each one to its simplest form.

Q9. Learn and write the table from 2 to 20.





Q10. Different planes are at different locations and at different speed. make a list of the aeroplanes and their location with its speed as indicated on the RADAR screen. Plane is already done for you.



SCIENCE

1. Interact with elders in your family or neighbourhood to find out various plants and animals that they have seen earlier but not now . Collect and paste any three of them in your note books and write a few lines about them.

2. Gather information on different materials which can be recycled. You can take help from various sources such as newspapers, magazines, talking to elders in your community, and the internet.

3. Prepare a diet chart to provide a balanced diet to a Twelve-year-old child. The diet chart should include food items that are not expensive and are commonly available in your area.

4. Draw a well labelled diagram

- Sources of different vitamin
- Magnets of different Shapes
- Laboratory thermometer
- Dicot and monocot seeds
-

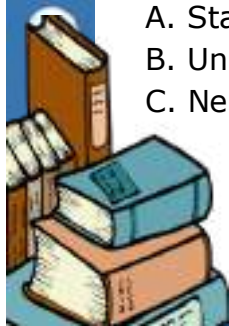
5. Model

- Life cycle of frog
- Uses of solar energy
- Different types of constellations
- Integrate farming
- Life cycle of a plant (any plant)

SOCIAL SCIENCE

1. On political maps of India locate the following:-

- A. States and it's capital
- B. Union Territories
- C. Neighbouring countries of India





2. On world map locate the following:-

A. Oceans and Continents

3. Prepare a list of various famous national parks and give the names of the animals found there. Get pictures of these animals and attach them on a map of India where the sanctuaries are located.

4. Name any five Indian companies and their CEOs. What logos, products and slogans they use for advertising their products? By using these titles

COMPANY	CEO	PICTURE OF LOGO	SLOGAN	PRODUCT
---------	-----	-----------------	--------	---------

NOTE – HOME WORK SHOULD BE DONE IN SOCIAL SCIENCE NOTEBOOK.

INFORMATION TECHNOLOGY (IT)

1. What are the different audio and video formats supported by Windows Media Player.
2. Write the steps to open picture folder.
3. Define Jump List.
4. How can you compare two files using Snap feature of Windows 10 ?
5. What are Removable storage devices ? Write any two examples.

GENERAL KNOWLEDGE (GK)

I. ANSWER THE FOLLOWING QUESTIONS:-

1. Which country has launched its first domestically developed deep sea exploration TANSUO-3?
2. Which Indian state recently became the first to implement a water break policy in schools?
3. Write the full form of VISTAAR, which is associated with agriculture.
4. Who holds the second highest office in the country?
5. Which country has officially joined the BRICS as a full member in January 2025?
6. Which mission made India the first country to reach Mars on its first attempt?
7. Which four cities host the Kumbh Mela?
8. Which article of the Indian Constitution deals with elections?
9. Who is the current Minister of Defence in India?
10. Which spacecraft was Sunita Williams originally scheduled to return to Earth on?
11. Which country won the most gold medals at the 2024 Paris Olympics?
12. The name of the Foy Sagar Lake has been recently changed; in Which state is this Lake located?
13. Which day is observed as Global Family Day every year?





14. Which state launch the Ladki Bahin scheme?
15. Who has been appointed as the new space secretary and chairman of the Indian Space Research Organisation?
16. Which state has achieved the highest number of hospital registrations under the Ayushman Bharat scheme in January 2025?
17. Where will the first International Olympic Research Conference be held?
18. Mumps disease, that was recently seen in news is caused by Which agent?
19. Which state is the host of National Saras Mela in 2025?
20. When is the 'World Braille Day' observed every year?
21. Which two sites from India have been included in the 2025 World Monument Watch List?
22. Which country is the host of FIDE Chess World Cup 2025?
23. Which country becomes the first Nation to criminalise Artificial intelligence child abuse tools?
24. Which state is home to India's first white tiger breeding centre?
25. How many women have won the recently Lok Sabha elections?

ART AND CRAFT (DRAWING)

Draw and colour your favourite food and health drink on dining table in drawing file or copy.

